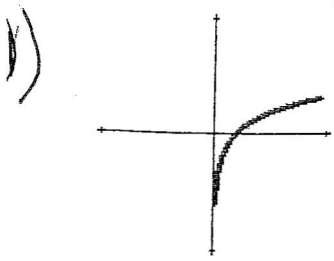
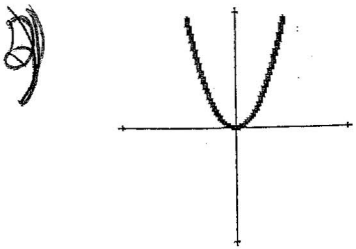


Matching: Match the graph with type of function (upper case) and equation (lower case).



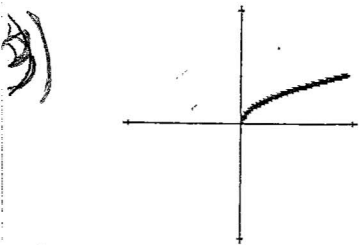
A) Quadratic

a) $Y = \cot x$



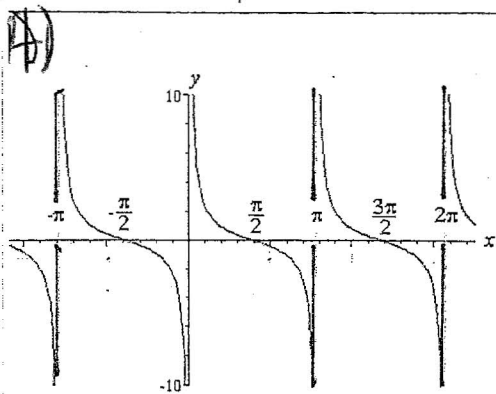
B) Absolute Value

b) $Y = \csc x$



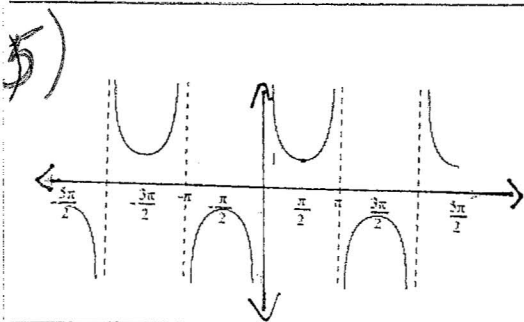
C) Cotangent

c) $f(x) = |x|$



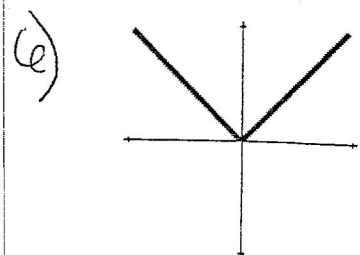
D) Square Root

d) $f(x) = x^2$



E) Logarithmic

e) $f(x) = \sqrt{x}$



F) Cosecant

f) $f(x) = \ln x$